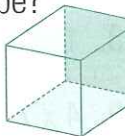
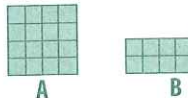


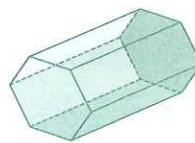
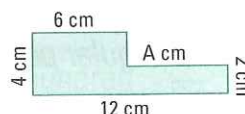





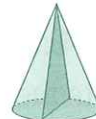
MONDAY

- Write the number before 200.
- $40 + 90 =$
- $\$2.50 + \$2.50 =$
- $50 + 2 + 100 =$
- $4^2 =$
- Which two of these numbers are odd?
4 10 30 7 11 18
- odd \times even =
- Is $\frac{1}{4}$ equivalent to $\frac{2}{8}$?
- How many vertices are on a cube?

- What is the meaning of 9 in 19 605?
- Draw a horizontal line.
- How many centimetres make up 4.2 m?
☐ 42 cm ☐ 402 cm ☐ 420 cm
- Write ten point zero one as a numeral.
- The time is 9.15. What will the time be in 25 minutes?
- How many edges are on a cylinder?
- $60 - 15 =$
- How many faces are on a sphere?
- Which rectangle has more area?

- How many days are in July?
- $5 \times 200 =$




TUESDAY

- Draw hands to show 6.10.

- $1^2 =$
- Name this shape.

- $15 + 7 =$
- Write the number after 899.
- $3.2 - 3.2 =$
- 1, X, 2, IX, 3, VIII, 4,
- $400 + 500 + 300 =$
- What 3-D shape is a door?
- $140 - 90 =$
- A = cm
Perimeter = cm

- $17 + 16 =$
- Write the sixth month of the year.
- $4 \times 11 =$
- Shade $\frac{1}{5}$.

- odd \times odd =
- $80 + 50 =$
- What is the cost of 4 text messages at 35c each?
- Write a factor of 20.
(Not 1 or 21)

CLUE
Ends in an odd number must be an odd number!
- Which rectangle has more area?


WEDNESDAY

- Write the number before 500.
- $8 \times 50 =$
- What is the sum of 50 and 90?
- $5^2 - 2^2 =$ - =
- There are faces on a pentagonal prism.
- $\$10.00 - \$5.60 =$
- Using 2, 8, 7, 1 make up the largest number possible.
- even \times odd =
- How many weeks are in a year?
- $0.35 > 3.00$ ☐ true ☐ false
- $1500 - 500 =$
- Name a pentahedron.
- The factors of 36 are 1, 2, 3, 4, 6, , 12, 18, 36.
- $\$6.50 + \$3.50 =$
- Is $\frac{1}{2}$ equivalent to $\frac{5}{10}$?
- $12 \times 11 =$
- Which shape do you see in the cross-section?

- Round 2326 (nearest 10).
- Complete the sequence.
1, 8, 3, 6, , 1, 8, 3, 6, 5, 1
- In 1287, which numeral represents the highest value?

THURSDAY

- Draw hands to show 4.35.

- $8 + 2 =$
- $700 - 300 =$
- What time is midnight?
- Choose and write a month in autumn.
- $16 - 7 =$
- How many faces on a sphere?
- $2.9 - 2.0 =$
- Halve 52.
- 2, 3, 5, , 11, 13, 17 and 19 are prime numbers less than 20.
- $8.5 + 3.5 =$
- How many edges are on a sphere?
- If tomorrow is Sunday, what was yesterday?
- $12 \times 12 =$
- Can 29 be divided by 2 equally?
- Is a pentagonal pyramid a hexahedron or a pentahedron?
- $50 \times 6 =$
- Shade $\frac{2}{3}$.

- $60 + 7000 + 400 + 2 =$
- Name this shape.
